

**O. P. JINDAL SCHOOL, SAVITRI NAGAR**  
**Periodic Test - II (2023 – 2024)**

**Class / Section: I ( )**

**MM: 20**

**Subject: Mathematics**

**Time: 1 Hr.**

Name: \_\_\_\_\_

Roll No.: \_\_\_\_\_

Invigilator's Sign: \_\_\_\_\_ Marks Obtained: \_\_\_\_\_

Examiner's Sign: \_\_\_\_\_

**General Instructions: All questions are compulsory.**

1) Colour the biggest number:

(2Marks)

94	88	100
----	----	-----

46	89	72
----	----	----


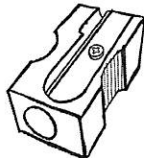


2) Write the missing number:

(2Marks)

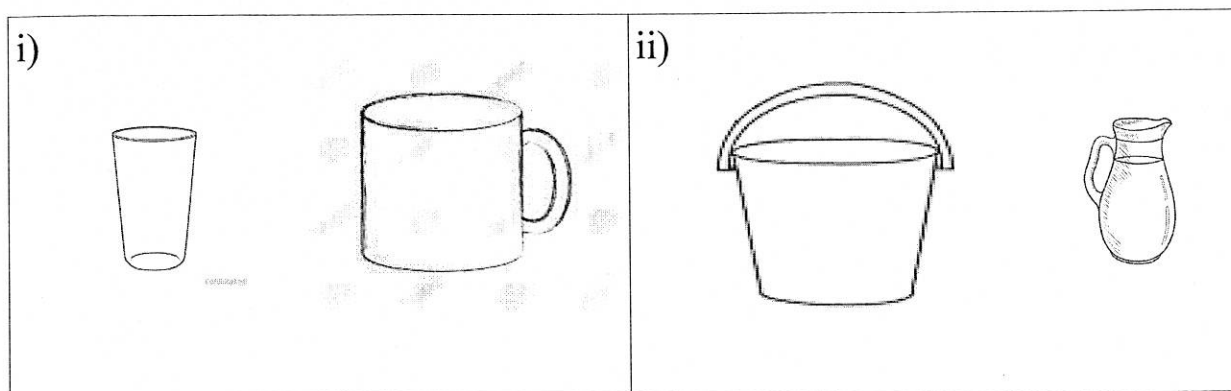
		57		59	
--	--	----	--	----	--

3) Circle the heavier object:

(2Marks)

<p>i)</p> <div style="display: flex; justify-content: space-around; align-items: center;">   </div>	<p>ii)</p> <div style="display: flex; justify-content: space-around; align-items: center;">   </div>
---	---

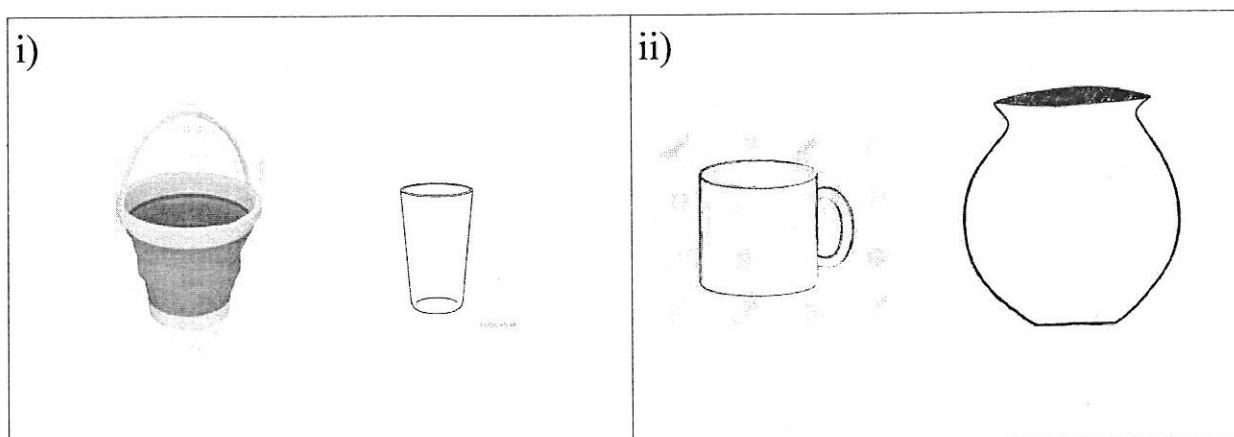
4) Write the number 1 and 2 according to their capacity: (2Marks)



5) Match the column: (4Marks)

A	B
82	Seventy-six
76	Forty-five
45	Sixty-six
66	Eighty-two

6) Tick (✓) the one that can hold more: (2Marks)

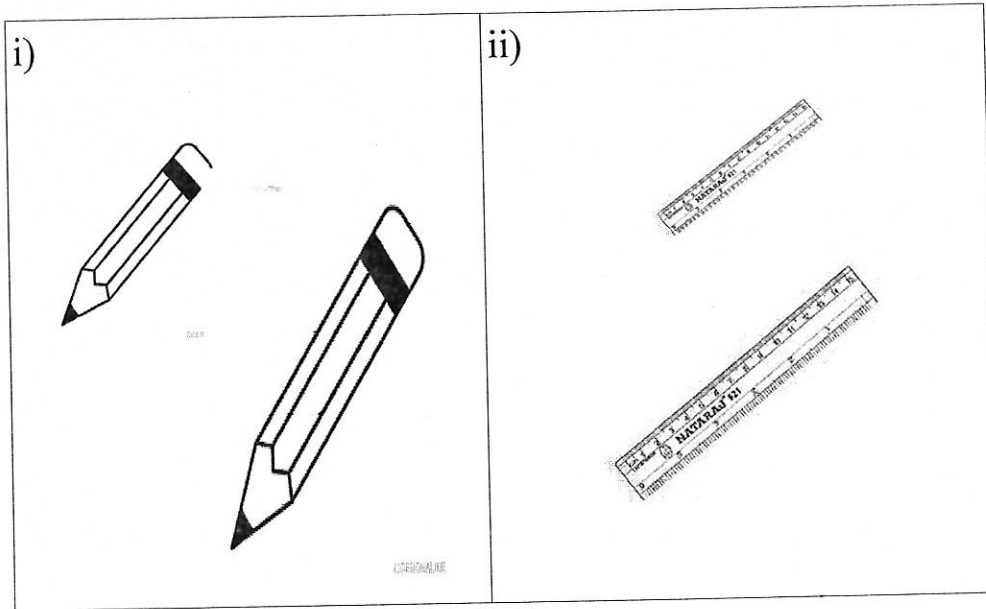


7) Rewrite the number from the smallest to the biggest: (2Marks)

48 , 36 , 58 - \_\_\_\_\_

8) Tick (✓) the longer object:

(2Marks)



9) Fill in the blanks:

(2Marks)

i) \_\_\_\_\_ 59

ii) 99 \_\_\_\_\_

\*\*\*\*\*